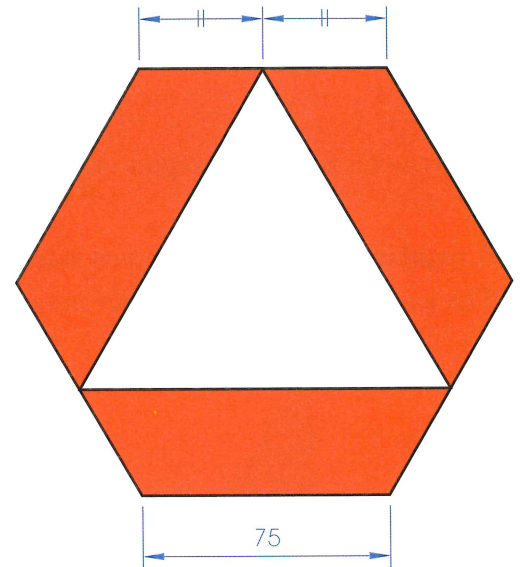

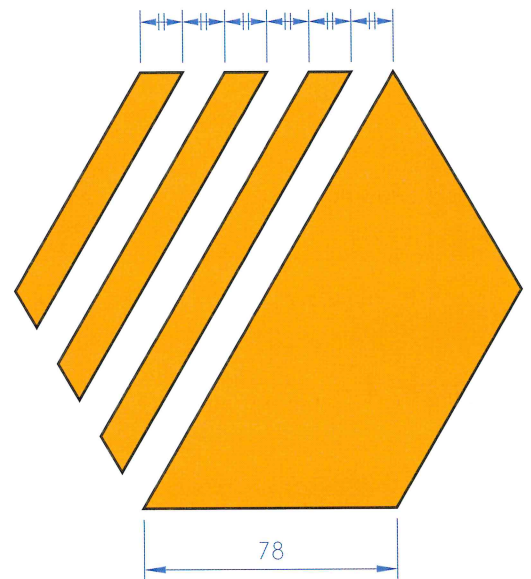


## Exercises

1. Reproduce the drawing of the **Construction Industry Federation** symbol shown across. It is based on a **regular hexagon** of 75 mm side. An **equilateral triangle** is also included in the symbol.



2. The figure over shows a drawing of the **Black and Decker** logo, which is based on a **regular hexagon** of 78 mm side. Draw this logo to the sizes given.



3. A drawing of the **Wolverhampton Wanderers Football Club** logo is shown across. The design is based on a **regular hexagon**. The eyes are in the shape of **isosceles right-angled triangles**. Make a drawing of the design.

